



*Inspiring
Minds,
Shaping
Futures*

DELHI ENGLISH ACADEMY

SUMMER

Holidays



HOMESCHOOLWORK

**CLASS
IV**



Laying the foundation of excellence



DELHI ENGLISH ACADEMY



Summer vacation is your time to shine - a chance to chase new dreams, explore the world around you and grow in ways you never imagined.

Dear Parents and Students,

Greetings from Delhi English Academy!

Summer vacation is a cherished chapter in a child's life - a season of joy, freedom and boundless possibilities. It offers young minds the precious opportunity to pursue their interests, explore their creativity and indulge in the simple pleasures of family togetherness. Whether it is laughter shared with siblings, stories exchanged with grandparents, or adventures embarked upon with parents, these golden days become the most treasured moments in a student's journey.





Guidelines for Holiday Home Work:-

- **All projects/ Homework to be done as specified.**
- **Work to be done neatly,creatively and relevant to the questions given.**
- **Holiday Homework submission date: 6th July 2026 (Monday)**
- **In order to keep children productively involved during the holidays, holiday homework has been assigned. We request parents to encourage and assist your child in completing the work sincerely and with creativity.**
- **Subject-wise homework details have been provided separately.**
- **Kindly take out printout of worksheets on an A4 size sheets and paste it in the notebooks.**
- **Marks will be awarded for every assignment worksheet/project in the upcoming Term-1 Examination.**
- **Project/assignment worksheet will be assessed and awarded on the basis of neatness and creativity.**
- **The school will reopen on 1st July, 2026.**



Subject - English

ACTIVITY

- Create a booklet describing 5 animals and 5 plants by describing traditional food and attire of Andaman and Nicobar Island.



WORKSHEET

Read the passage below and answer the questions that follow :

A little brown squirrel named Squeaky lived in a big oak tree. He loved to eat nuts and seeds all day long. Every morning, Squeaky would run down the tree to find his breakfast. He was very quick and could climb up the tree in a flash. Squeaky had a long, bushy tail that he used for balance. He often chattered happily when he found a tasty acorn. All the children in the park loved to watch him play.

i) What was the name of the squirrel?

- a) Nutty
- b) Squeaky
- c) Bushy
- d) Brownie

ii) Where did Squeaky live?

- a) In a small bush
- b) In a big oak tree
- c) In a hole in the ground
- d) In the park's bench

iii) What did Squeaky love to eat?

- a) Fruits and leaves
- b) Grass and flowers
- c) Nuts and seeds
- d) Bread and cheese

THE LADY WITH THE LAMP

A) Choose the correct option:

i) Florence Nightingale was known as "The Lady with the Lamp" because:

- a) She invented the first electric lamp
- b) She made rounds at night to care for wounded soldiers with a lamp in her hand
- c) She wrote books by lamplights) Her house had many lamps

POEM – A BEAUTIFUL DAY

A) Choose the correct option:

i)The poem "**A Beautiful Day**" mainly describes:

- a) A rainy and gloomy evening
- b) The joy and brightness of nature on a pleasant day
- c) A busy day at school
- d) A festival celebration

Grammar Section

I) Nouns: Types (Tick ✓ the correct option)

i) Which of the following words is a common noun?

- a) Delhi
- b) Sunday
- c) girl
- d) Ganga

ii) Identify the proper noun in the sentence: “My friend Rahul lives in Mumbai.”

- a) friend
- b) lives
- c) Mumbai
- d) My

iii) A group of sheep is called a _____.

- a) team
- b) flock
- c) bunch
- d) army

II. Nouns : Number

i) What is the plural form of the word ‘cat’?

- a) cates

- b) cats
- c) caties
- d) cato

ii) Choose the correct plural for 'box'.

- a) boxs
- b) boxies
- c) boxes
- d) boxen

III. Nouns : Countable and Uncountable (Tick ✓ the correct option)

i) Which of the following is a countable noun?

- a) water
- b) book
- c) sand
- d) air

ii) Which of the following is an uncountable noun?

- a) chair
- b) milk
- c) pen
- d) apple

Subject - Hindi

ACTIVITY

प्रश्न:1 अंडमान एंड निकोबार आइलैंड पर मिलने वाले किसी एक जीव का पिक्चर बनाये(ऑन पेपर प्लेट):



WORKSHEET

प्रश्न 2: नीचे दिए गए वाक्यों में संज्ञा शब्दों को रेखांकित करें –

1. राम स्कूल जा रहा है।
2. गीता ने आम खाया।
3. दिल्ली भारत की राजधानी है।
4. मोहन के पास एक कुत्ता है।
5. सूरज आकाश में चमक रहा है।

प्रश्न 3: निम्नलिखित शब्दों को उनके प्रकार के अनुसार लिखें –

(व्यक्ति, स्थान, वस्तु)

शब्द	प्रकार
पुस्तक	_____
मुंबई	_____
शिक्षक	_____
नदी	_____
कुर्सी	_____

प्रश्न 4: वर्णमाला के स्वर लिखिए –

Subject - Maths

ACTIVITY

Q1. Using the data about the Andaman and Nicobar Islands (total 572 islands, 38 inhabited, 534 uninhabited , distance 1200 km fom mainland India), solve number-based questions on place value, addition, subtraction, comparison, and rounding off to nearest 100 on a scrapbook.



WORKSHEET

Multiple Choice Questions:

Q1. Which number has 5 in the hundreds place?

- a) 5,432
- b) 4,532
- c) 3,254
- d) 2,345

Q2. What is the sum of 2,789 and 3,456?

- a) 6,245
- b) 6,255

c) 6,235

d) 6,345

Q3. Which is the smallest number?

a) 6,543

b) 6,453

c) 6,345

d) 6,534

Q4. Fill in the Blanks:

a) The greatest 4-digit number is _____.

b) The place value of 7 in 8,739 is _____.

c) $3,999 + 1 =$ _____.

d) The number just before 5,000 is _____.

Q5. Find the Missing Number:

a) $4,567 + \underline{\quad} = 9,000$

b) $\underline{\quad} + 2,345 = 7,890$

c) $3,999 + \underline{\quad} = 5,555$

Q6. True or False:

a) $5,678 + 3,222 = 9,000$ (_____)

b) 1,000 more than 8,999 is 9,999 (_____)

c) $4,321 + 2,679 = 7,000$ (_____)

Q7. Add the following:

7. $51050 + 22987 + 15679$

	T-Th	Th	H	T	O

8. $14398 + 10589 + 29807$

	T-Th	Th	H	T	O



Subject - EVS

ACTIVITY

1. Make a model on Mini Nature Garden by using cardboard, green chart paper. Clay or play dough etc. according to your Roll No. Like shown in the picture below 🖱️

Roll no. 01 to 12




Make a model on Mini Village Model by using cardboard, green chart paper. Clay or play dough etc. according to your Roll No. Like shown in the picture below 🖱️

Roll no. 13 to 24



Make a model on **Balanced Diet Plate** by using cardboard, green chart paper. Clay or play dough etc. according to your Roll No. Like shown in the picture below 🙌

Roll No. 25 onwards



2. Paste pictures of Animals and Sea Life of Lakshadweep in a scrapbook.

Like shown in the picture below 🙌



WORKSHEET

A. Multiple choice questions

1. People living near our home are called our _____.

- a) friends b) neighbors
c) teachers d) doctors

2. We go to _____ to study.

- a) market b) hospital
c) school d) park

3. Sick people are treated in a _____.

- a) library b) school
c) hospital d) shop

4. We buy things from the _____.

- a) market b) hospital
c) school d) temple

5. A person who keeps us safe is a _____.

- a) doctor b) teacher
c) police officer d) shopkeeper

B. Match the Following

1. School a. Treatment
2. Hospital b. Books
3. Library c. Study
4. Market d. Shopping

C. True or False

1. We should help our neighbours. _____
2. We go to the market to play football. _____
3. A hospital is a place for treatment. _____
4. Teachers work in schools. _____
5. We should keep our neighbourhood clean. _____

D. Look at the following pictures carefully and write their names below them.



A) _____



B) _____



C) _____




D) _____

Subject - GK

ACTIVITY

Draw a scenic view of Andaman and Nicobar islands on an A4 size sheet.s



WORKSHEET

Q1. MCQ

- a. Which of the following has the highest number of legs?
 - i. Termite
 - ii. Fish
 - iii. Cat
- b. This animal can drink up to 30 gallons of water in 10 minutes.
 - i. Leopard
 - ii. Tiger
 - iii. Dromedary Camel
- c. Which is the most common hibernation place?
 - i. Deserts
 - ii. Mountains
 - iii. Underground
- d. The area where land meets the sea is called a.....
 - i. coastline
 - ii. sea shore
 - iii. sea bed
- e. The..... divides the earth into two equal hemispheres.
 - i. meridians
 - ii. equator
 - iii. latitude

Q2. Fill in the blanks:

- a. A book of maps is known as

- b. A low lying area between two hills is called a
- c. is used to measure rainfall.
- d. is the largest cat in cat species.
- e. Has its heart located in its head.

Q3 Identify the given picture.





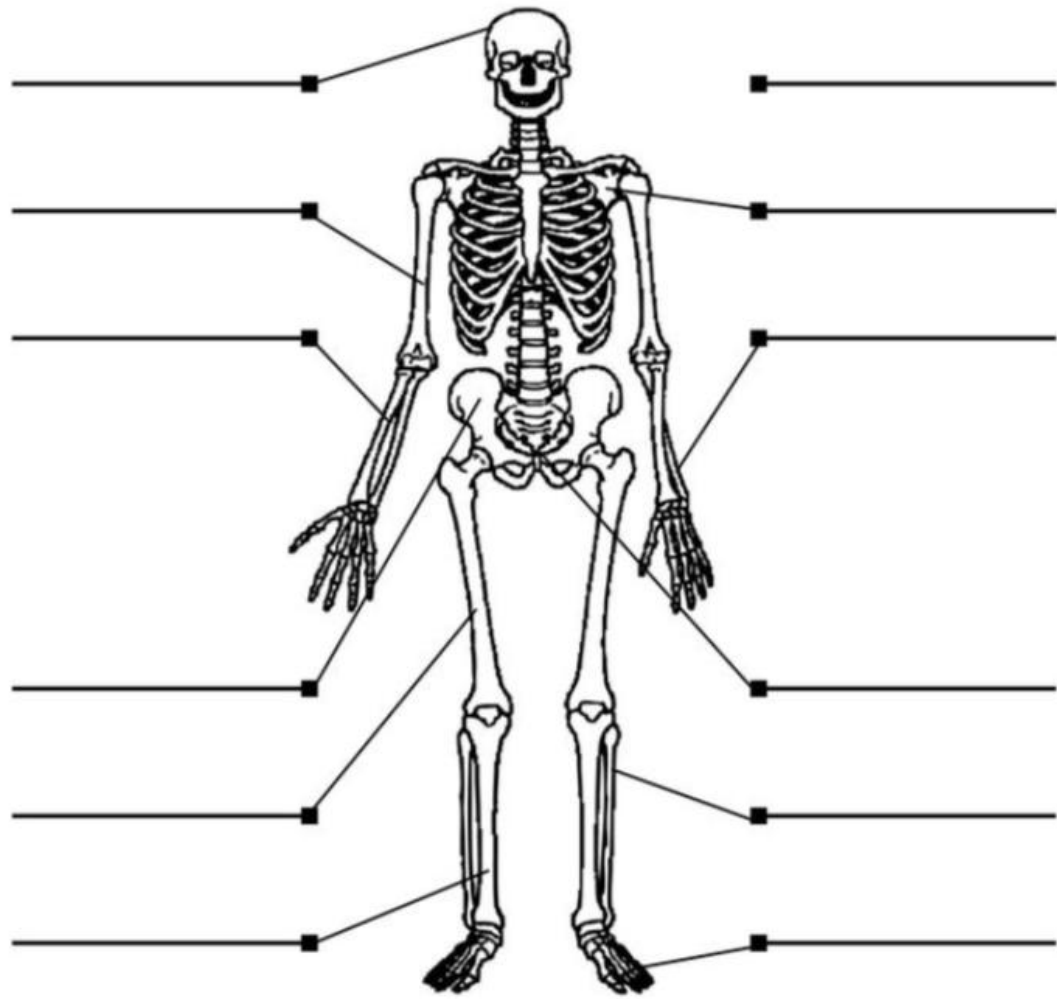


Q4. One word answer.

- a. Name the plant which is used for the treatment of malaria.
Ans. _____
- b. An earthworm breathes with the help of
Ans. _____
- c. Which is the fastest animal on the earth?
Ans. _____
- d. What is the group of land is called?
Ans. _____
- e. On which river has a Hirakud Dam been built?
Ans. _____

Q5. Fill in the blanks using the given help box.


- | | | | |
|---------|-----------|---------|---------|
| skull | fibula | sternum | radius |
| coccyx | ulna | pelvis | femur |
| scapula | phalanges | tibia | humerus |



Subject - Computer

ACTIVITY

1. Create a folder on the computer named “Andaman and Nicobar Photos” and save all the pictures in that folder, neatly take print out and paste in scrapbook.



WORKSHEET

A Choose the correct answer

1. Which of these is a storage device?

- a) Keyboard
- b) Mouse
- c) Pen Drive

2. Which storage device is round in shape?

- a) CD
- b) Monitor
- c) CPU

3. Which device stores the maximum data?

- a) Hard Disk
- b) CD
- c) Floppy Disk

4. Which device is used in mobile phones?

- a) Memory Card
- b) Printer
- c) Scanner

5. Which storage device is small and portable?

- a) Pen Drive
- b) Speaker
- c) Joystick

B. Match the following

Column A.

Column B

- | | |
|-----------------|-------------------------|
| 1. Pen Drive. | a. Used in mobiles |
| 2. Hard Disk. | b. Portable storage |
| 3. Memory Card. | c. Stores large data |
| 4. CD. | d. Round storage device |

B. Collect or paste pictures of different storage devices on an A4 sheet and write one line about each.

Subject - Drawing

1. Make a paper folding bird and an animal with origami sheet related to Lakshadweep.



2. Draw a famous animal of Andaman Nicobar on an A4 size sheet and paste a pencil shaving on it.



Subject - Safety Troop

ACTIVITY

1. Make a poster on Andaman and Nicobar island's beach safety rules on an A4 size sheet.



WORKSHEET

Multiple Choice Questions

1. Which of the following is a private part?

- A. Eyes
- B. Nose
- C. Chest
- D. Hair

2. "Alarms" in your body mean:

- A. Time to sleep
- B. Time to eat
- C. Something may be wrong or unsafe
- D. Time to study

3. Who can be part of your safety network?

- A. Strangers
- B. Parents and teachers
- C. Unknown people on road
- D. Anyone you don't know

4. Which of the following is a warning sign?

- A. Laughing
- B. Sweaty palms
- C. Sleeping
- D. Reading

5. Who is the boss of your body?

- A. Teacher
- B. Parents
- C. Yourself
- D. Friends

6. Fill in the Blanks :

- Private parts are covered by our _____ costume.
- We should say _____ if someone makes us uncomfortable.
- If we feel unsafe, we must tell a _____ adult.
- Our body gives us warning _____ when something is wrong.

- Parents and teachers are part of our safety _____.

7. Write True or False :

- Everyone has the right to say “No” to unwanted touch.
- We should keep unsafe touch a secret.
- Strangers are part of our safety network.
- Feeling scared or sweaty can be a warning sign.
- We should ignore our body’s warning signals.