

# **DELHI ENGLISH ACADEMY**

**(CBSE Affiliated Sr. Secondary School)**

**Phone No.: 8810270723, 8882720656**

**E-mail:delhienglishacademy1998@gmail.com**

**Website: [www.deadwarka.in](http://www.deadwarka.in)**

**f : Delhi English Academy School Dwarka New Delhi**



**Here's to a summer vacation  
that's a playground for your  
imagination, where you can  
dream big, set goals, and work  
towards achieving them.**

**SUMMER**



**CLASS : III**

# Happy Summer Holiday

Summer Holiday  
Homework



Dear Parents and Students,

Summer holidays commence from **May 16<sup>th</sup> 2025 to June 30<sup>th</sup> 2025**.  
The school will reopen on **July 1<sup>st</sup> 2025**.

It is summer vacation time, a time to relax as well as to get fruitfully occupied in scholastic and co-scholastic areas. Keeping this thing in mind, we have designed interesting Projects/ Assignments to be completed during the summer vacation. This would encourage in-depth learning, strengthen concepts and prepare ground for improve academic output.

It will not only enable you to recapitulate what was taught but will also help you to connect yourselves to the various learning process.

As parents, kindly motivate and lend support to your children and ensure that they complete the given work well-in-time and the best of their ability. Your encouragement can actually make a huge difference to the ultimate learning outcome of these projects.



# GENERAL INSTRUCTIONS

**Dear Students,**


Please follow the guidelines below to ensure smooth and timely completion of your Holiday Homework.

- ❖ Homework will be graded on the basis of neatness, creativity and originality of ideas.
- ❖ Homework should be completed neatly as per the given instructions and school script must be followed while doing written work in all the subjects.
- ❖ Ensure that the holiday homework is completed by the children themselves. Parents should only act as a guide in completing the work.
- ❖ Practice writing daily in English and Hindi in old notebooks for good handwriting.
- ❖ Printout of the worksheets can be taken or the same can be done on a white A4 size sheet with name, class and topic mentioned on the top.
- ❖ **Holiday Homework Submission date is 08/07/2025.**

Wishing you a joyful and productive summer vacation!

## SUBJECT: ENGLISH

**Q1. Make a “Sikkim’s Animal” fact file on an A3 size sheet. Choose any one animal found in Sikkim (like the Red Panda or Snow Leopard). Paste pictures and write its habitat, diet etc.**



**Q2. Having good habits is very important for our successful and happy life. Make a wall hanging (using card boards, ice cream sticks etc.) showcasing your good habits which you have learnt during your summer break.**



## Subject: हिंदी

गतिविधि 1 -

- सिक्किम से संबंधित नीचे दिए गए चित्रों को A3 शीट पर चिपकाओ।
  1. सिक्किम का राज्य फूल
  2. सिक्किम का राज्य पशु
  3. सिक्किम का खान-पान



## गतिविधि -2

- A3 शीट पर नीले और हरे रंग का कूड़ेदान बनाकर उनके उपयोग के बारे में 2-2 पंक्तियाँ लिखो।



## Subject: Mathematics

### Activities

Q1. On a scrapbook paste pictures of different mountain ranges of Sikkim along with their name and write down it's height and length.





Q2. Make a model of wall clock using waste material.



**Subject: EVS**

Q1. Make a Sikkimese mask. Use cardboards, colours, clay etc.



Q2. Poster making on 'SAVE ANIMALS SAVE NATURE'. Use A-3 size sheet, colours, etc.



## **SUBJECT : G K**

**Q1. Draw a colourful traditional costume of men and women of Sikkim on A-3 size sheet.**



## **Subject: Computer**

- **Make a beautiful NATIONAL FLAG OF SIKKIM on A4 size white card paper.**

## **Subject: Art**

1) Make a beautiful 3D colourful eye mask of any animal.



Or



2) Make a beautiful door mat with the help of cartage sheet. Decorate with waste materials.



**Delhi English Academy**  
**(CBSE Affiliated Senior Secondary School)**  
**Holiday Homework Worksheet**  
**Class – III**  
**Subject – English**

Name: \_\_\_\_\_

Date: \_\_\_\_\_

**Q1. Fill in the blanks with correct question words:**

- a) \_\_\_\_\_ is Megha's house? (What/Where)
- b) \_\_\_\_\_ glass is this? (When/ Whose)
- c) \_\_\_\_\_ did you eat? (What/Who)
- d) \_\_\_\_\_ is today's date? (What/Where)
- e) \_\_\_\_\_ you know how to skate? (Do/How)
- f) \_\_\_\_\_ do you come to school? (How/Who)

**Q2. Rewrite these sentences using capital letters and full stop:**

- a) my friend does not speak English

\_\_\_\_\_

- b) the dog is barking loudly

\_\_\_\_\_

- c) she stays in delhi

\_\_\_\_\_

- d) i study in delhi English academy school

\_\_\_\_\_

- e) the boys were playing in the park

\_\_\_\_\_

**Q3. Make Sentences:**

- a) strange - \_\_\_\_\_

- b) pedlar - \_\_\_\_\_

- c) persisted - \_\_\_\_\_

**Delhi English Academy**  
**(CBSE Affiliated Senior Secondary School)**  
**Holiday Homework Worksheet**  
**Class – III**  
**Subject – Hindi**

1) भारत के किन्हीं 10 राज्य तथा उनकी भाषाओं के नाम लिखों।

---

---

---

---

---

---

---

---

2) निम्नलिखित शब्दों का वर्ण विच्छेद करो ।

1. जल=

2. घर=

3. फल=

4. फूल=

5. पानी=

6. सूरज=

3) अनुस्वार और अनुनासिक वाले 5-5 शब्द लिखों ।

---

---

---

---

---



4) शब्दों को सही क्रम में लगाकर शुद्ध वाक्य बनाइए:

1. रही / गा / लड़की / है
2. बना / माँ / स्वादिष्ट / रही हैं/ भोजन
3. रहा / चित्र / बच्चा / बना / हैं ।
4. दूध / पिला / रही / है / दादी
5. फल / बाजार / से / राम / लाया
6. घूमने / हम / पार्क / गए
7. रही / सफाई / राधा / हैं / कर
8. खेत / किसान / रहा / काम / में / कर/ है
9. सुबह / जल्दी / उठता / मैं / हूँ
10. खेल / रहा / मैदान / में / मोहन / है

**Delhi English Academy**  
**(CBSE Affiliated Senior Secondary School)**  
**Holiday Homework Worksheet**  
**Class – III**  
**Subject – Mathematics**

1. Insert >, < or = in the blank

a. 2009 \_\_\_\_\_ 2090

b. 3883 \_\_\_\_\_ 3838

c. 6000 \_\_\_\_\_ 6000

d. 1234 \_\_\_\_\_ 3124

2. Write the greatest and smallest number in the given box

a. 317, 2101, 8173, 3120.

G	S
---	---

b. 4281, 3723, 4132, 4133

G	S
---	---

c. 7281, 4383, 1224, 5325

G	S
---	---

Q3 Fill in the blanks :

a.  $946321 + \text{-----} = 689613 + 946321$

b.  $828471 + 0 = \text{-----}$

c. 9999 added to ----- gives 10000.

d.  $40693 + 1 = \text{-----}$

e. The successor of 93815 is -----

Q4. Write the numeral and the number name that each abacus represent:

(a)

Abacus (a) has 2 beads in the L column, 2 beads in the T column, 3 beads in the Th column, 1 bead in the H column, 2 beads in the T column, and 1 bead in the O column.

Numeral : .....

Number name : .....

(b)

Abacus (b) has 3 beads in the L column, 2 beads in the Th column, 2 beads in the H column, 1 bead in the T column, and 3 beads in the O column.

Numeral : .....

Number name : .....

(c)

Abacus (c) has 2 beads in the L column, 1 bead in the T column, 1 bead in the Th column, 1 bead in the H column, 6 beads in the T column, and 1 bead in the O column.

Numeral : .....

Number name : .....

(d)

Abacus (d) has 2 beads in the H column, 1 bead in the T column, 1 bead in the Th column, 2 beads in the H column, 1 bead in the T column, and 3 beads in the O column.

Numeral : .....

Number name : .....



**Delhi English Academy**  
**(CBSE Affiliated Senior Secondary School)**  
**Holiday Homework Worksheet**  
**Class – III**  
**Subject – EVS**

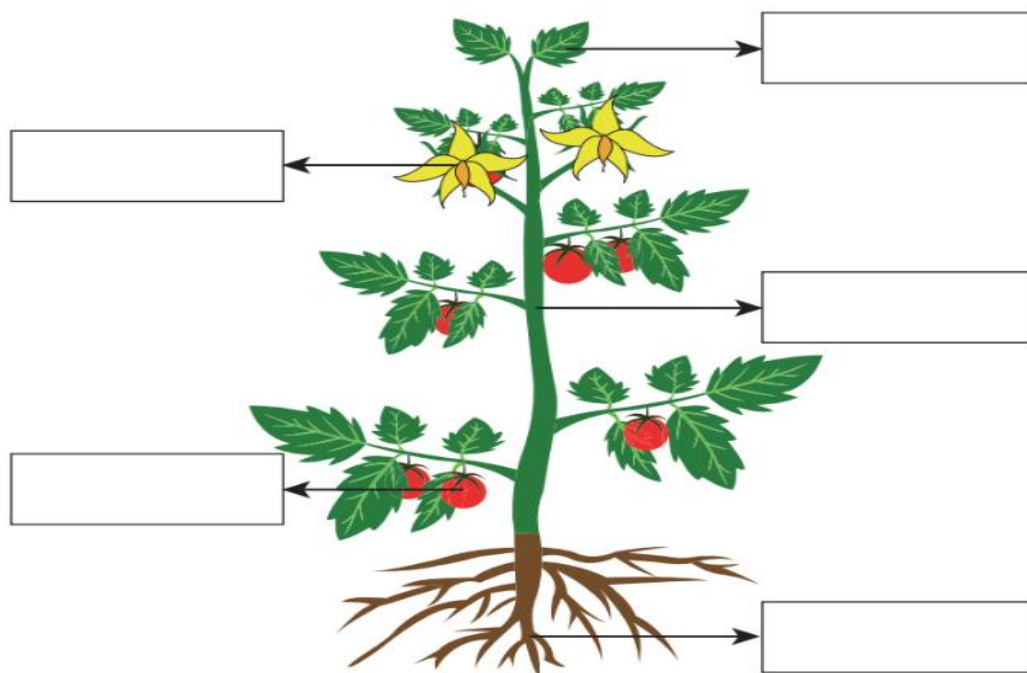
Name: \_\_\_\_\_

Date: \_\_\_\_\_

Q1.Fill in the blanks:

- a) Some social workers form organisation called\_\_\_\_\_.
- b) Playing team games teach us the values of teamwork and \_\_\_\_\_.
- c) The leaves of a \_\_\_\_\_ plant are in the form of spines.
- d) Penguins have \_\_\_\_\_ feet that help them to swim.

Q2.Look at the picture and label the parts of the plant.



Q3. Give two examples for each of the following-

- a) Animals that eat plants \_\_\_\_\_, \_\_\_\_\_
- b) Leaves are used as medicine \_\_\_\_\_, \_\_\_\_\_
- c) Team games \_\_\_\_\_, \_\_\_\_\_

**Delhi English Academy**  
**(CBSE Affiliated Senior Secondary School)**  
**Holiday Homework Worksheet**  
**Class – III**  
**Subject – G.K.**

**Q1 MCQ**

1. I am an engineer in DMRC coach factory.  
a. MBA ( ) b. B. Tech ( ) c. B. Ed. ( ) d. MBBS ( )
2. The little balls of ice falling with rain.  
a. Thunder ( ) b. Snow ( ) c. Dew ( ) d. Hailstone ( )
3. This animal can sleep for three years.  
a. Emu ( ) b. Sloth ( ) c. Lion ( ) d. Camel ( )
4. This animal friend has quills on its back.  
a. Rabbit ( ) b. Dolphin ( ) c. Owl ( ) d. Porcupine ( )
5. This animal has 3 heart and 8 arms.  
a. Octopus ( ) b. Squirrel ( ) c. Eel ( ) d. Crocodile ( )

**Q2. Fill in the blanks :-**

- a. \_\_\_\_\_ is not a tree. It is the longest grass in the world.
- b. \_\_\_\_\_ is known as “ The red planet”.
- c. The fruit of coconut tree is \_\_\_\_\_.
- d. \_\_\_\_\_ is named after the messenger of God.
- e. Cats cannot taste \_\_\_\_\_ things.

**Q3. One word answer.**

- a. Loud sound in the sky. \_\_\_\_\_
- b. A person who gives legal advice to his clients. \_\_\_\_\_
- c. The degree which obtain by a medical student. \_\_\_\_\_
- d. This animal can move its eyes in different directions. \_\_\_\_\_
- e. This planet consists of rings. \_\_\_\_\_


Q4 Identify the given pictures.




a. \_\_\_\_\_



b. \_\_\_\_\_



c. \_\_\_\_\_



d. \_\_\_\_\_



e. \_\_\_\_\_

Q5. Draw the road sign of “ No entry for vehicles”.



**Delhi English Academy**  
**(CBSE Affiliated Senior Secondary School)**  
**Holiday Homework Worksheet**  
**Class – III**  
**Subject – Computer**

Chapters - 1 & 2

**Fill in the Blanks**

1. The parts of a computer that can be touched are called \_\_\_\_\_.
2. The devices used for storing data are called \_\_\_\_\_ devices.
3. The devices that give results after processing are called \_\_\_\_\_ devices.
4. \_\_\_\_\_ software is designed to do a specific type of work.
5. The \_\_\_\_\_ manages the overall working of a computer.
6. \_\_\_\_\_ is an ability of machines to do the tasks on their own, much like humans.
7. A drone is a flying \_\_\_\_\_.
8. Drones can be used by \_\_\_\_\_ for watering the crops.

**Read each question carefully and answer in one word.**

1. Name a device that can read words, pictures, or numbers from paper and store them in a computer: \_\_\_\_\_
2. Name a device that is used to store a huge amount of data: \_\_\_\_\_
3. Drones are controlled with this device: \_\_\_\_\_
4. It is a flying robot: \_\_\_\_\_
5. Name a device that is used to hear sounds and music stored on a computer:  
\_\_\_\_\_

**Identify the picture and Name the Device**

